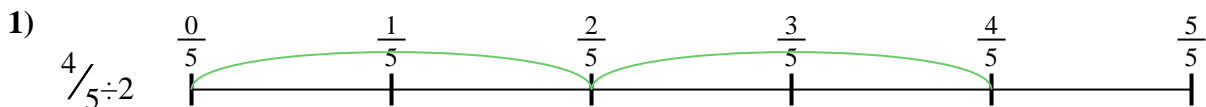





Use the numberline to solve each problem. The first is marked for you.


**Answers**




1. \_\_\_\_\_




2. \_\_\_\_\_



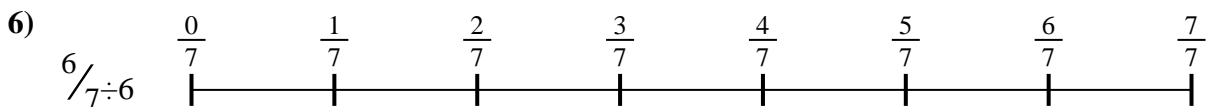
3. \_\_\_\_\_




4. \_\_\_\_\_



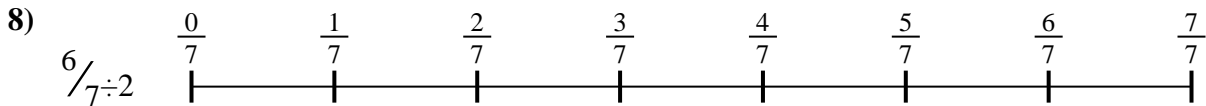
5. \_\_\_\_\_



6. \_\_\_\_\_



7. \_\_\_\_\_



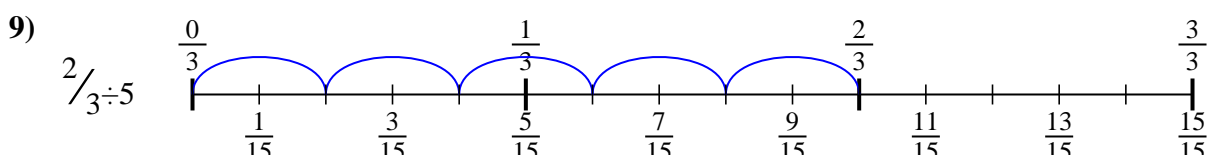
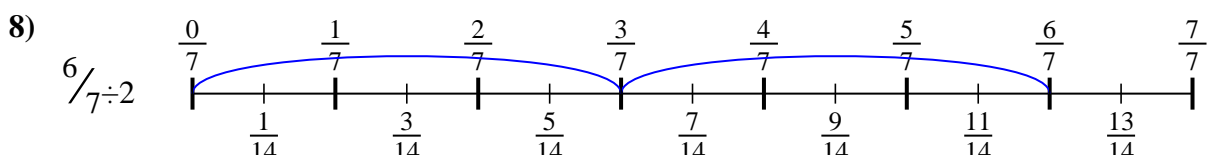
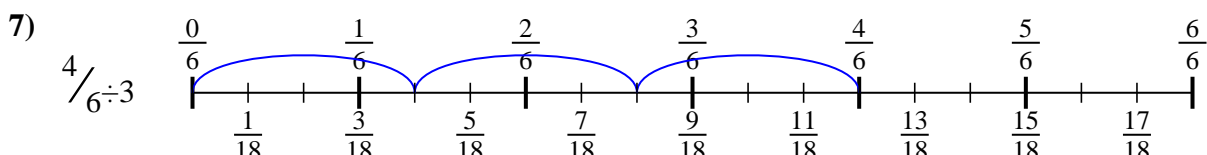
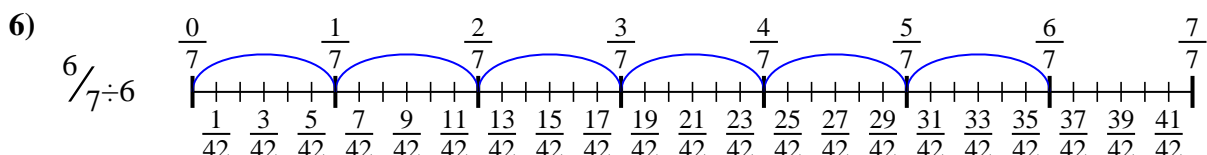
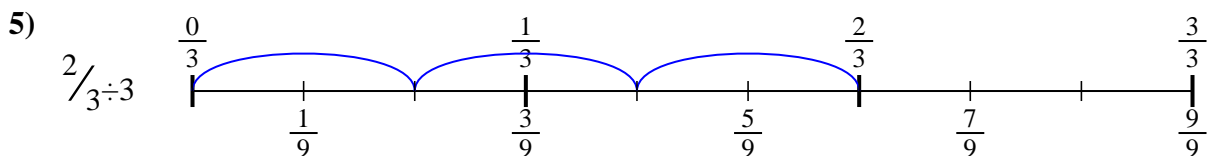
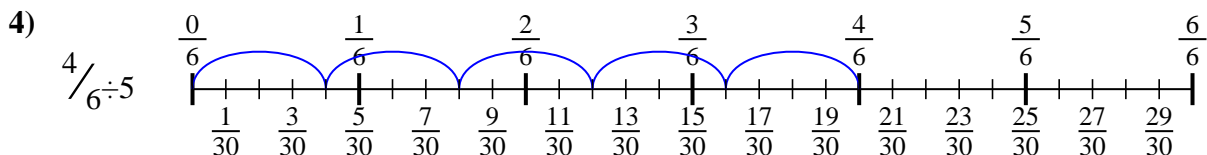
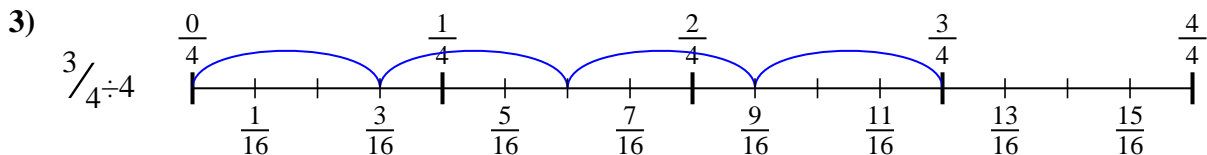
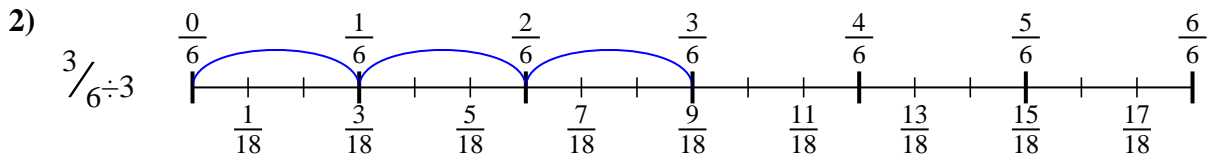
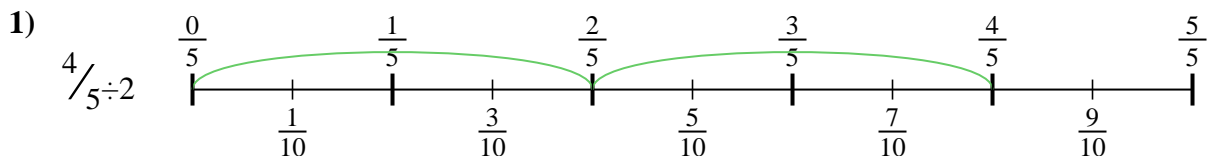
8. \_\_\_\_\_



9. \_\_\_\_\_



Use the numberline to solve each problem. The first is marked for you.



**Answers**

1.  $\frac{4}{10}$

2.  $\frac{3}{18}$

3.  $\frac{3}{16}$

4.  $\frac{4}{30}$

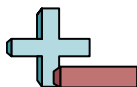
5.  $\frac{2}{9}$

6.  $\frac{6}{42}$

7.  $\frac{4}{18}$

8.  $\frac{6}{14}$

9.  $\frac{2}{15}$



Use the numberline to solve each problem. The first is marked for you.

**Answers**

$6/14$

$4/10$

$4/30$

$2/9$

$2/15$

$6/42$

$4/18$

$3/16$

$3/18$

1. \_\_\_\_\_

2. \_\_\_\_\_

3. \_\_\_\_\_

4. \_\_\_\_\_

5. \_\_\_\_\_

6. \_\_\_\_\_

7. \_\_\_\_\_

8. \_\_\_\_\_

9. \_\_\_\_\_

1)

2)

3)

4)

5)

6)

7)

8)

9)